


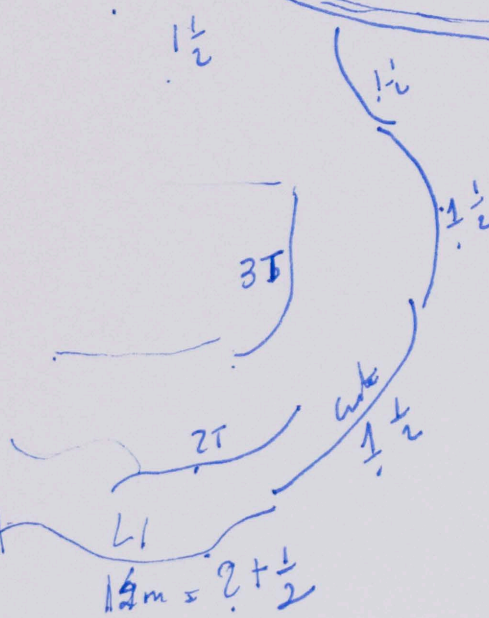
instituto de arte contemporânea



Super -

$L_1 -$

$L_{15} - 1 + \frac{1}{2}$



L_2 INF

L_2 SUP - $1 \frac{1}{2}$

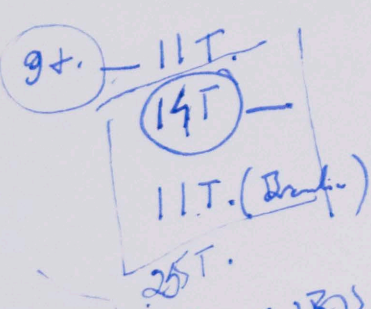

L_3 INF

L_3 SUP - 2T.

L_4 INF

L_4 SUP - $1T \frac{1}{2}$

L_5 SUP - $1T \frac{1}{2}$



10 on
8.5 Brute
19.5

20 TUBOS.
5.

8T
3T
11T
1T
12T

14
12
26.

7 TUBOS - dentes on

18 T. novo

2 chaps cristal + 1 ptele

1 $\left\{ \begin{array}{l} \bullet 2m \times 2m \rightarrow \text{OK nte ambalata} \\ \bullet 60 \times 2m \rightarrow \end{array} \right\}$

2 $\left\{ \begin{array}{l} \bullet 2^{10} \times 2.00m \\ \bullet 250 \times 75 \rightarrow \text{violeta} \end{array} \right\}$

3 atele e Anu u tonu $\left\{ \begin{array}{l} 3 \text{ alt} \times 3M \text{ lay.} \\ \text{9m} \end{array} \right\}$ Tern $\bar{\tau}$ veembolen

3 jateads
6mm
CURVOS

1 $\left\{ \begin{array}{l} 1.05 \times 2.50M \\ 6mm \text{ } 2.M \times 3.00M \end{array} \right\}$ OK

2 $\left\{ \begin{array}{l} 2.00 \times 1.65 \\ 1.60 \times 1.00 \end{array} \right\}$ OK

3 $\left\{ \begin{array}{l} \text{---} \\ \text{---} \end{array} \right\}$?

4 $\left\{ \begin{array}{l} 2.50 \times 2 \\ 2.50 \times 55 \\ 1 \text{ placa. paradede} \end{array} \right\}$

4 + 2 + 1

$\bigcirc \rightarrow 170 \times 50 \text{ . lay.}$

$\bigcirc \rightarrow 90mm - \text{plambolen}$

Instituto de arte contemporânea